

BOARD OF SECONDARY EDUCATION (TELANGANA)
SUMMATIVE ASSESSMENT – I

TENTH CLASS SOCIAL STUDIES MODEL PAPER

PAPER – I (ENGLISH VERSION)

Time: 2 hrs. 45 mins.

PART – A & B

Maximum Marks: 40

INSTRUCTIONS:

- i) 15 minutes allocated to read the Question Paper, 2.30 Hours allocated to write answers.
- ii) PART – A must be answered in a separate answer sheet.
- iii) Students can take PART – A (Question Paper) with them.
- iv) Map and PART – B (Bit paper) should tag to the answer sheet and gave them to the invigilator.

Time: 2 hrs. 15 mins.

PART – A

Marks: 35

SECTION – I

INSTRUCTIONS:

- i) Answer the following questions in 1 – 2 sentences.
- ii) Each question carries ONE mark. $7 \times 1 = 7$
1. How is the service sector different from other sectors? Why?
2. What is meant by bursting monsoons? By which monsoons give maximum rainfall to India.
3. In which rivers of India 'V' shaped valleys are formed?

Answer the Questions given below the table

S.No	State	Percapita income – 2012 (in Rs.)
1	Punjab	78,000
2	Himachal Pradesh	74,000
3	Bihar	25,000

4. Which state is a backward one?
5. How did the per capita income calculate?
6. "Many People Prefer organised sector but large number of people get employment in unorganised sector". Appreciate the role of unorganised sector in providing employment.
7. How would it help if there was a government river basin authority for overall Planning of water use?

SECTION - II

INSTRUCTIONS:

i) Answer the following questions in 4 – 5 sentences.

ii) Each question carries TWO marks.

6 × 2 = 12

8. Write about Himalayan, Deccan plateau rivers and how they responsible for the formation of northern plains.

9. How can you say whether a family is rich or poor which elements do you take in to consideration to decide it?

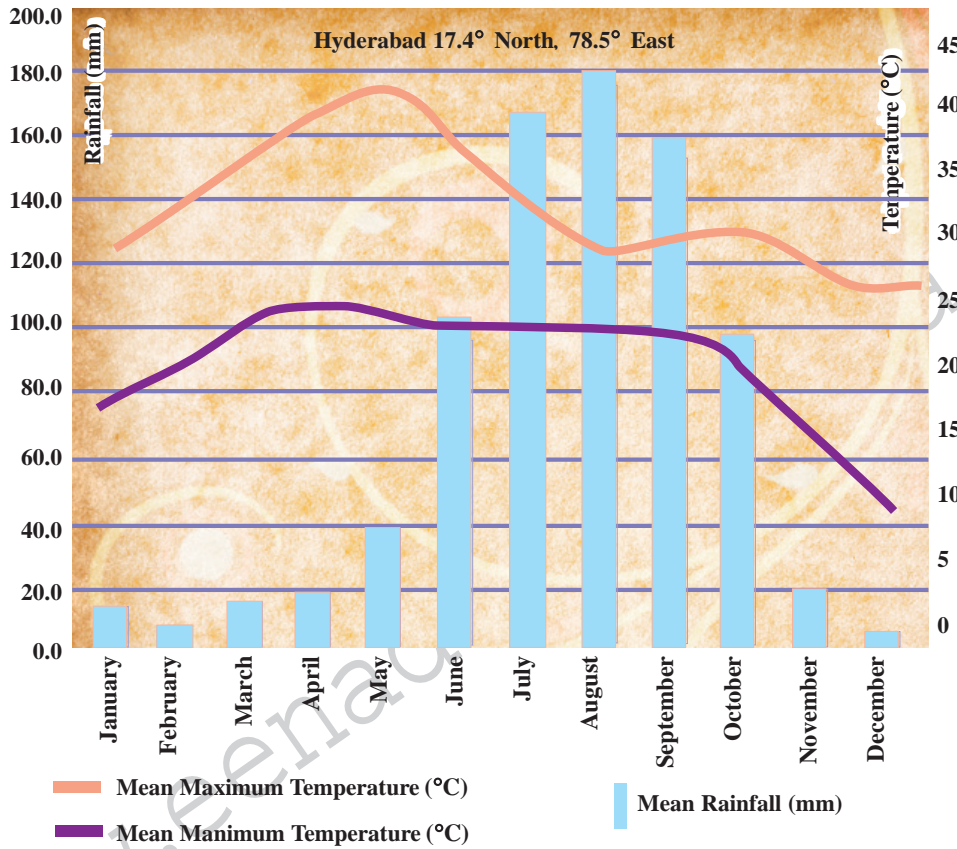
10. Observe the below table and answer Questions given below.

Traditional Indian Seasons		
Seasons	Months According to the Indian (lunar) calendar	Months According to the Western (solar) calendar
Vasantha	Chaitra – Vaishakha	March – April
Grishma	Jyestha – Ashadha	May – June
Varsha	Sraavana – Bhadrapada	July – August
Sharad	Aswayuja – Karthika	September – October
Hemanta	Margashira – Pushya	November – December
Shishira	Magha – Phalguna	January – February

a) In which Telugu month the schools are open after the summer vocation?

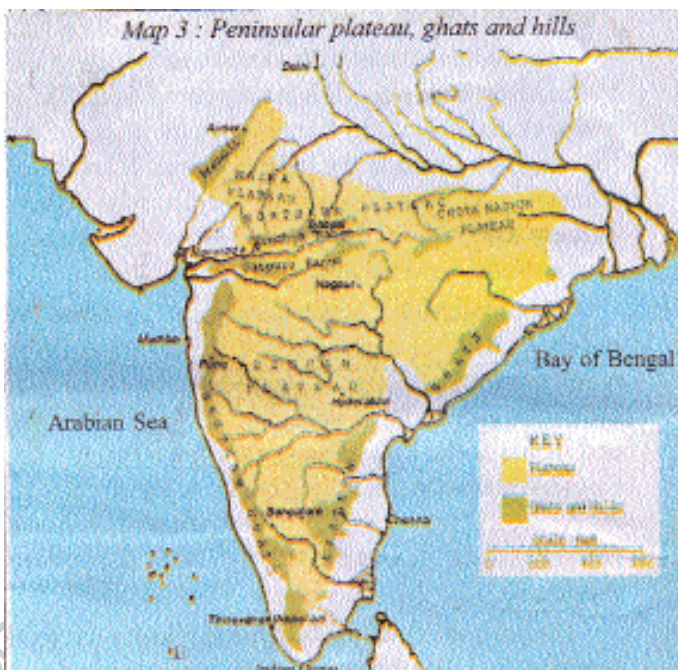
b) On which criteria the seasons are classified?

11. Observe the climatograph and answer the question given below.



- Which months received the maximum amount of rainfall?
- Why was the temperature so high in the months of March and May?

12. Answer the questions with the help of the beside map.



- In which Plateau did Telangana state situate.
- Which of the mountains between the river Narmada flows through?

13. Prepare two slogans on prevention of water Pollution.

SECTION - III

INSTRUCTIONS:

- i) Answer the following questions in 8 – 10 sentences.
 - ii) Each question has Internal Choice. You can choose any one.
 - iii) Each question carries FOUR marks. $4 \times 4 = 16$
14. Do you think the classification of economic activities into primary, secondary and service sectors is useful? Explain how?

(OR)

What Physiographic divisions of India do you take in to consideration?

15. Do you think that the present laws related to ground water enough for proper utilisation. If not what steps do you suggest for proper utilisation of ground water resources?

(OR)

Students in Himachal Pradesh came to school enthusiastically siastically an over whelming proportion of students enjoyed their schooling experience. The teacher loves us well said Neha enrolled in class 4 in a village in Chamba children had dreams of studying till higher classes and aspirations to be policeman, scientists and teachers. The attendance rate was very high in primary classes but also among older children?

Q. By studying the above paragraph write the measures taken by your state Govt to improve schooling among children?

16. What measures do you suggest to reduce the effect of global warming?

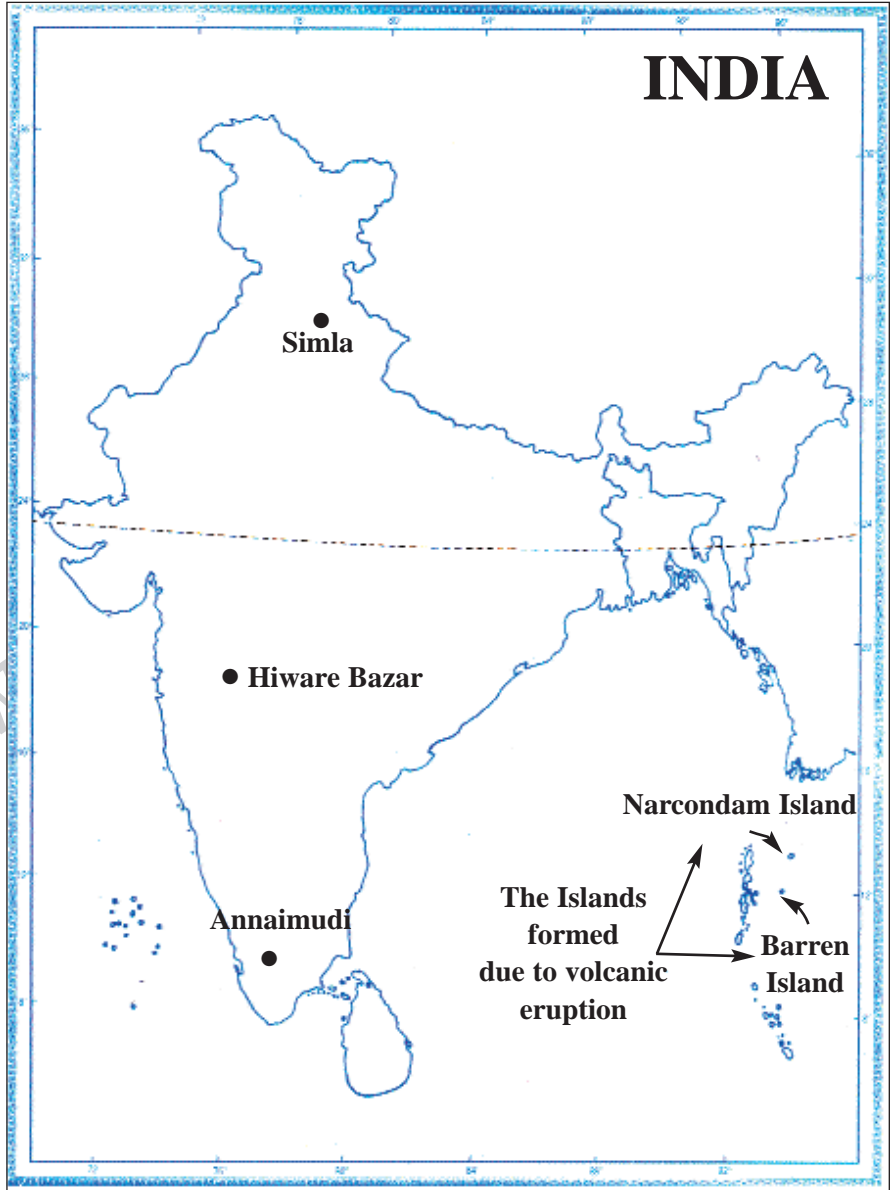
(OR)

Why do you think parents accord less priority to girls education as compared to boys? Explain.

17. Point out the following places in a given India Map.

- 1) Simla
- 2) Hiware Bazar
- 3) Annaimudi
- 4) The Island formed due to volcanic eruption.

A:

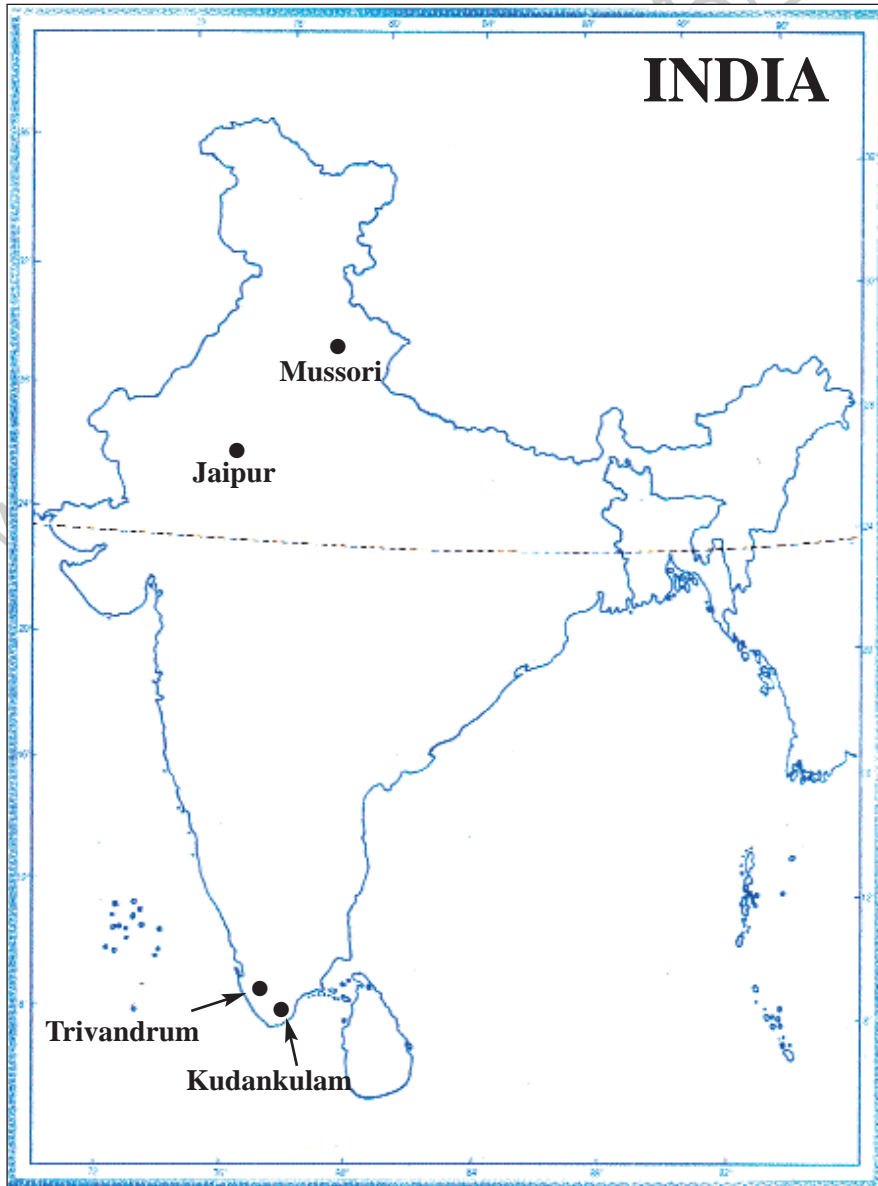


(OR)

Point out the following places in a given India Map.

- 1) Kudankulam
- 2) Mussori
- 3) Jaipur
- 4) Trivandrum

A:



INSTRUCTIONS:

- i) Write the capital letters (A, B, C, D) showing the correct answer for the following in the brackets provided against each question.
- ii) Each question carries $\frac{1}{2}$ mark.
- iii) Answer all the questions.
- iv) Answers are to be written in the question paper only.
- v) Marks will not be awarded in case of any over writing and rewriting or erased answers.

$$10 \times \frac{1}{2} = 5$$

SECTION – IV

18. Which of the following regions have maximum temperatures? ()
A) Polar regions
B) Temperate regions
C) The places near to the equator
D) The places far away from equator
19. Pick out the wrong pair. ()
A) The piece of land between the two rivers – Doab
B) The southern most tip point of India – Kanyakumari
C) The lesser Himalayas – Evergreen forests
D) Jammu and Kashmir – Mishmi Hills
20. Which of the following is correct statement? ()
1. Different persons can have different development goals.
2. What may be development for one may not be development for the other
A) 1, 2 are correct
B) Only 2 is correct
C) 1 is correct
D) None of these
21. Some persons sold goods and did small repairs in your village/town they come under ()
A) Primary
B) Secondary
C) Tertiary
D) Organised
22. The longest canal in Rajasthan ()
A) Indira Gandhi Canal
B) Nehru Canal
C) Rajiv Gandhi Canal
D) Sanjay Gandhi Canal
23. Which of the following rivers formed with confluence of two rivers? ()
A) Indus
B) Ganges
C) Brahmaputra
D) Yamuna
24. X: The Birth place of Godavari – Nasik
Y: The birth place of Krishna – Mahabaleswar ()
A) Only X is right
B) Y is right
C) Both X and Y are right
D) Both X and Y are wrong

25. Nature has a dominant role in the production process of this sector ()
A) Primary sector
B) Secondary sector
C) Tertiary sector
D) Primary and Secondary sectors
26. For comparison per capita income of all countries measured in the dollars of ()
A) Australia B) Canada C) Singapore D) US
27. Which of the following place is far away from equator and low temperatures recorded in winter? ()
A) Kanyakumari B) Gangtok C) Chennai D) None

PART - B

ANSWERS

18-C; 19-D; 20-A; 21-C; 22-A; 23-B; 24-C; 25-A; 26-D; 27-B.

Writer: K. Srinivasa Rao