

BOARD OF SECONDARY EDUCATION (AP)
SUMMATIVE ASSESSMENT – II
TENTH CLASS SOCIAL STUDIES MODEL PAPER
PAPER – I (ENGLISH VERSION)

Time: 2 hrs. 45 mins.

PART – A & B

Maximum Marks: 40

INSTRUCTIONS:

- i) 15 minutes allocated to read the question paper, 2.30 hours allocated to write answers.
- ii) PART – A must be answered in a separate answer sheet.
- iii) Students can take PART – A (Question paper) with them.
- iv) Map and PART – B (Bit paper) should tag to the answer sheet and gave them to the invigilator.

Time: 2 hrs.

PART – A

Marks: 30

SECTION – I

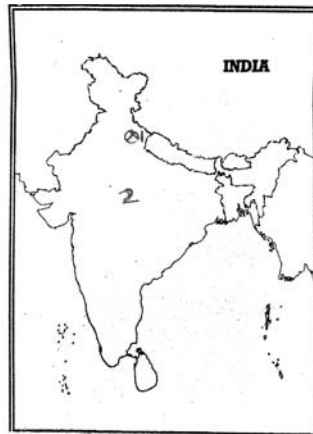
INSTRUCTIONS:

- i) Write answers to the FOUR questions in 1 – 2 sentences.
- ii) Each question carries ONE mark. 4 × 1 = 4
1. Name the two communities that are on the verge of extinction.
2. What is the full form of MNREGA?
3. Appreciate the role of IPCC to reduce AGW.
4. What is Foeticide? Can we see in this in present society?

SECTION – II

INSTRUCTIONS:

- i) Write answers to the FIVE questions in 4 – 5 sentences.
- ii) Each question carries TWO marks. 5 × 2 = 10
5. What was the role of women in Chipko andolan? Do you support their methods?
6. How do you appreciate geographical location of India.
7. Identify one state for each movement in the given India's Political map relating to the following social movements marked as 1 and 2.
 - 1) Chipko Movement
 - 2) Narmada Bachao Andolan



8. Do these two statements mean the same thing? Justify your answer.
- People have different development goals.
 - People have conflicting development goals.
9. "Population is boon to country but over population is a curse" Justify your answer.

SECTION – III

INSTRUCTIONS:

- Write answers to the FOUR questions in 8 – 10 sentences.
- Each question has Internal Choice. You can choose any ONE.
- Each question carries FOUR marks. 4 × 4 = 16

10. a) What do you understand by under employment?
Explain with an example each from the urban and rural areas.

(OR)

- b) What are the different conflicts in the use of water for Tungabhadra river basin?

11. a) How is climate change causing global warming?
Suggest measures to minimise the influence of global warming.

(OR)

- b) What kind of environmental problems did the spread of green revolution create? What lessons does this have for the future?


12. a) The following table shows the percentage on workers employed in different sectors in India in 1972 – 73 and in 2009 – 2010 i.e. after 37 years observe it and answer the question.

Year	Agriculture	Industry	Services
1972 – 73	74%	11%	15%
2009 – 10	53%	22%	25%

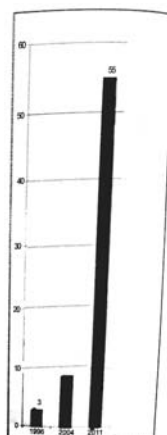
(OR)

- b) See the below graph and write a brief note on the in equality in India based on the graphs and figures.

*Total Wealth held
by Billionaires
(in Billion Rupees)*



*Increase in the
Number of
Billionaires*



13. a) Locate the following in a given India Map
- i) Silent valley project
 - ii) Mahanadi
 - iii) Tropic of Cancer
 - iv) Aravali Mountains

(OR)

- b) i) The highest Mountain Peak in India
- ii) The river flows through the Rift valley
 - iii) The Sun Rise state of India
 - iv) The central high lands.

www.eenadupratibha.net

www.eenadupratibha.net

INSTRUCTIONS:

- i) Answer ALL the questions.
- ii) Each question carries $\frac{1}{2}$ mark.
- iii) Answers are to be written in the question paper only.
- iv) Write the CAPITAL LETTERS (A, B, C, D) showing the correct answer for the following questions in the brackets provided against each question.
- v) Marks will not be awarded in case of any over writing and rewriting or erased answers.

$$20 \times \frac{1}{2} = 10$$

SECTION – IV

14. The famous Hill stations Simla, Mussorie located in... ()
A) Himadri B) the Lesser Himalayas
C) Shivaliks D) None of the above
15. Why do different people have different developmental goals? ()
A) based on their living conditions
B) based on their interests
C) based on their incomes
D) based on their knowledge
16. Nubra valley is found in ()
A) Himachal Pradesh B) Ladakh
C) Uttaranchal D) Punjab
17. Which of the following is a part of working capital ()
A) Raw material and land
B) Raw material and building
C) Raw material and Money in hand
D) Money in hand and machinery
18. Which of the following is responsible for blood formation? ()
A) Carbohydrates B) Proteins C) Vitamins D) Minerals
19. Besides Sikkim state is also planning to ban chemical fertilisers and pesticides. ()
A) Arunachal Pradesh B) Nagaland
C) Tripura D) Uttarakhand
20. Which of the following statements are true? ()
1) The main reason for migration in women marriage
2) Migration in Male employment opportunities.
A) Only 1 is true B) Only 2 is true
C) 1, 2 are false D) 1, 2 are true

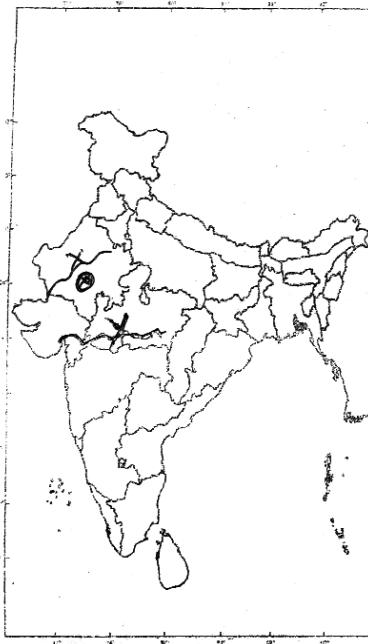
21. Courts banned endosulfan as it violated ()
A) Right to Freedom B) Right to employment
C) Right to life D) Right to Equality
22. Match the following. ()
i) Loo a) Coromandel coast
ii) Mango showers b) Andhra Pradesh
iii) Winter rainfall c) Dry and hot winds
iv) Upper air currents d) Jet streams
A) i-c, ii-b, iii-a, iv-d B) i-a, ii-b, iii-c, iv-d
C) i-b, ii-c, iii-a, iv-d D) i-d, ii-c, iii-b, iv-a
23. Chambal, Betwa, Ken and Son belongs to this river system ()
A) Indus B) Ganga C) Godavari D) Krishna
24. The tribal people who belongs to South America ()
A) Gaucho B) Massai C) Yutra D) Qiang
25. Which of the following cities do not come under the effect of the sea? ()
A) Mumbai B) Chennai
C) Visakhapatnam D) Nagpur
- ★ Read the paragraph and answer the Questions that given below.
What does the NIN survey indicate out of the seven thousand children, in the age group 1 – 5 years, examined in the survey from many states in the country, 45% of children are underweight.
26. National Institute of Nutrition is located in ()
A) Hyderabad B) Mumbai C) Delhi D) Poona
27. According to NIN survey the Percentage of under weight children in the age group of 1 – 5 years is ()
A) 55% B) 45% C) 60% D) 40%
28. Organic Farming is appreciated by many due to ()
A) the use of chemical fertilisers and pesticides
B) Rely on natural techniques such as crop rotation compost and biological processes.
C) The use of local resources including on farm biological processes.
D) Both B and C
29. Rachel Carson's silent spring praised by many, the reason is ()
A) Its focus on Narmada Valley Development project
B) Its theme is against the construction of Polavaram Project
C) Focus on the reduction in the use of CFC's
D) The effect of DDT on humans.

★ Answer the following Questions with the help of the following Table.

Year	Agriculture	Industry	Services
1972 – 73	74%	11%	15%
2009 – 10	53%	22%	25%

30. The Percentage of workers employed in both secondary and tertiary in the year of 1972 – 73 was ()
A) 74 B) 11 C) 15 D) 26
31. The percentage of workers employed in primary sector decreased from 1972 – 73 to 2009 – 10 ()
A) 74 B) 53 C) 21 D) 26

★ Answer the below questions with the help of given India Map.



32. The underground river marked as X is the Map is ()
A) Luni B) Narmada C) Mahanadi D) Ganges
33. The river flow through Riftvalley marked as Y is ()
A) Mahanadi B) Narmada C) Tsangpo D) Cauveri

PART - B: ANSWERS

14-B; 15-C; 16-B; 17-C; 18-D; 19-D; 20-D; 21-C; 22-A; 23-B; 24-A; 25-D; 26-A; 27-B; 28-D; 29-D; 30-D; 31-C; 32-A; 33-B.