

**BOARD OF SECONDARY EDUCATION (TELANGANA)**  
**SUMMATIVE ASSESSMENT – II**  
**TENTH CLASS SOCIAL STUDIES MODEL PAPER**  
**PAPER - II (ENGLISH VERSION)**

Time: 2 hrs. 45 mins.

PART – A & B

Maximum Marks: 40

**INSTRUCTIONS:**

- i) 15 minutes allocated to read the question paper.
- ii) 2.30 hours allocated to write answers.
- iii) PART – A must be answered in a separate answer sheet.
- iv) Map and PART – B (Bit paper) should tag to the answer sheet and give them to the invigilator.

Time: 2 hrs.

PART – A

Marks: 35

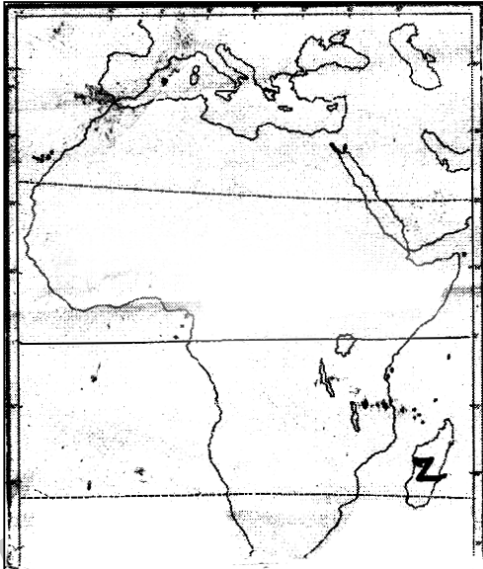
**SECTION – I**

**INSTRUCTIONS:** i) Answer the following questions in 1 – 2 sentences.

ii) Each question carries ONE Mark.

7 × 1 = 7

1. How did the USSR escape from the Great Depression?
2. Define Proxy war.
3. Draw the rough sketch of Telangana state.
4. Observe the Political Map of Africa and answer the question.



**Q:** Name the country (Island country) which marked as 'Z'

5. Appreciate the two qualities of Sardar Vallabhbhai Patel do you like most.
6. What was the comment of Hasrat Mohani on constitution?
7. Who gave the famous speech "I have a dream"?

SECTION – II

INSTRUCTIONS: i) Answer the following questions in 4 – 5 sentences.

ii) Each question carries TWO Marks.

6 × 2 = 12

8. What were the various strategies used by a social Movement?
9. "In every country some people are differentiated because of their identity". Do you agree?
10. Read the following paragraph and answer the question

A number of National and regional parties have to come together to form Government at the centre. While this enable the central government to become more sensitive to multiple view points in politics and policy matters. It is also caused instability.

Q: "Coalition governments are responsible for the political instability".

11. What role did schooling play in the national movements?
12. "Liberty is gifted us by our constitution". Mention briefly about the ideals of Indian constitution.
13. Observe the Time line chart and answer the questions given below.

I. Proclamation of the Weimar Republic	Nov 9, 1918
II. Hitler becomes chancellor of Germany	Jan 30, 1933
III. Germany invades Poland	Sep 1, 1939
IV. Germany invades the U.S.S.R.	June 22, 1941

- Q: a) Which country was the Weimar Republic belong to?  
b) What was the immediate cause of Second World War?

SECTION – III

INSTRUCTIONS: i) Write FOUR questions given below.

ii) Each question has Internal Choice.

iii) Each question carries FOUR Marks.

4 × 4 = 16

14. Do you find the presence of aggressive nationalism, imperialism, power blocks and militarism around us today too?

(OR)

Why should India have cordial relations with neighbouring countries?

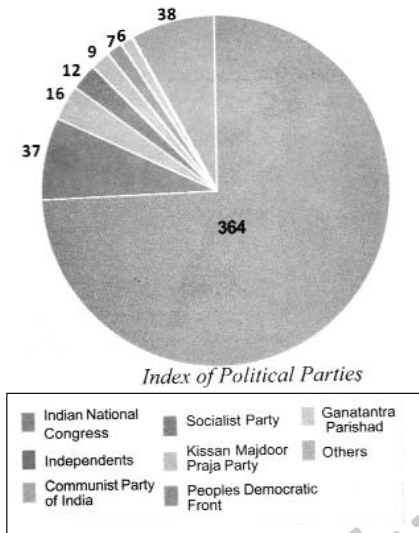
15. How were workers and peasants mobilised during the last years of freedom struggle

(OR)

How can you say that right to vote plays a key role in democracy?

16. Observe the below Pie graph and answer the questions that are given below.

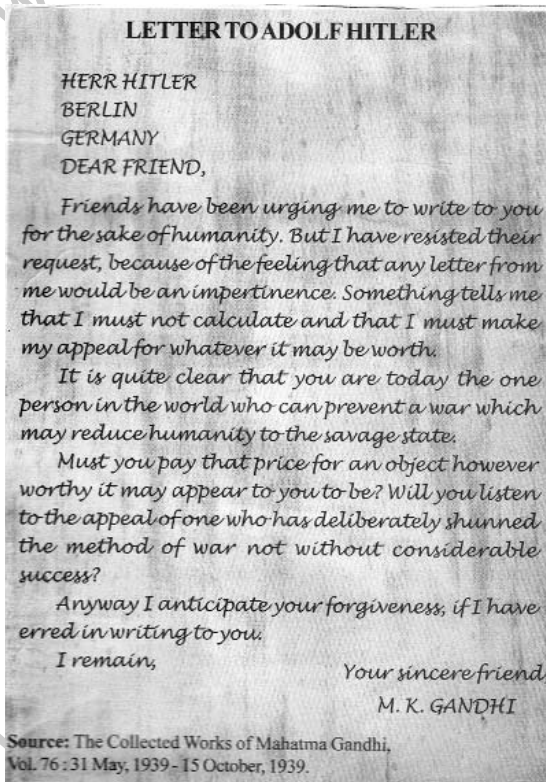
Seat Share of various Political Parties in 1952



- Which Political Party showed dominance in 1952. General elections?
- How many seats were secured by Independents?
- What are the seats difference between the communists and socialists?
- Write down the number of seats won by Indian National Congress.

(OR)

Read the below letter carefully and answer the questions that are given below.



- Who wrote the letter?
- What is the meaning of of HERR?
- What request did Gandhiji ask Hitler in this letter?
- Did Hitler accept his request?

17. Locate the following in the given map of the World.

- i) Dutch East Indies
- ii) The Sick Man of Europe
- iii) East Pakistan
- iv) The capital of England

(OR)

- i) Serbia
- ii) Myanmar
- iii) Red Sea
- iv) Latin America

[www.eenadupratibha.net](http://www.eenadupratibha.net)

[www.eenadupratibha.net](http://www.eenadupratibha.net)

**INSTRUCTIONS:**

- i) Write the capital letters (A, B, C, D) showing the correct answer for the following in the brackets provided against each question.
- ii) Each question carries  $\frac{1}{2}$  mark.
- iii) Answer all the questions.
- iv) Answers are to be written in the question paper only.
- v) Marks will not be awarded in case of any over writing and rewriting or erased answers.

$$10 \times \frac{1}{2} = 5$$

1. The famous slogans of Jai Hind, and Delhi Chalo were given by ( )  
A) Bhagat Singh B) Rabindranath Tagore  
C) Netaji Subhash Chandra Bose D) Sardar Vallabhbhai Patel
2. The International organisation formed immediately after First World War was ( )  
A) U.N.O. B) The league of the Nations  
C) Amnesty International D) World Bank
3. Coalition government means ( )  
A) A party which wins with absolute majority  
B) Government formed with the help of some parties  
C) Parties forming government with the help of the President  
D) All the above
4. Irom Sharmila is from which state? ( )  
A) Manipur B) Nagaland C) Meghalaya D) Assom
5. This is not related to the First General Elections in India ( )  
A) Symbols were introduced  
B) Separate ballot boxes for each candidate  
C) Massive campaign to encourage the voters  
D) Electronic Voting Machines were used
6. The movement that developed the idea of sustainable development is ( )  
A) The Green Peace Movement B) Chipko Movement  
C) Meira Paibi Movement D) Narmada Bachao Andolan
7. Which one of the following is not a fundamental principle of U.N. ( )  
A) Preserve peace  
B) Uphold human rights  
C) Respect international law and promote social progress  
D) Eliminate colonialism
8. Vietnam was a colony of ( )  
A) Britain B) Spain C) Dutch D) French

