

**BOARD OF SECONDARY EDUCATION (AP)**  
**SUMMATIVE ASSESSMENT – I**  
**TENTH SOCIAL MODEL PAPER**  
**PAPER – I (ENGLISH VERSION)**

Time: 2 hrs. 45 mins.

PART – A & B

Maximum Marks: 40

Time: 2 hrs. 15 mins.

PART – A

Marks: 30

**SECTION – I**

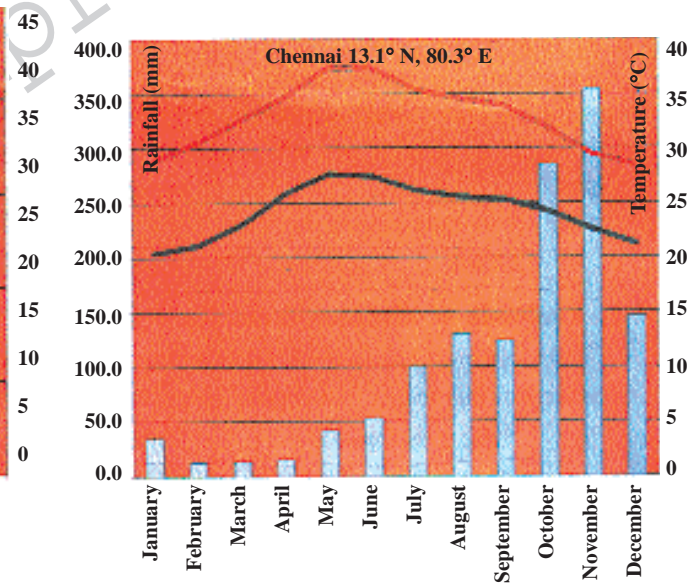
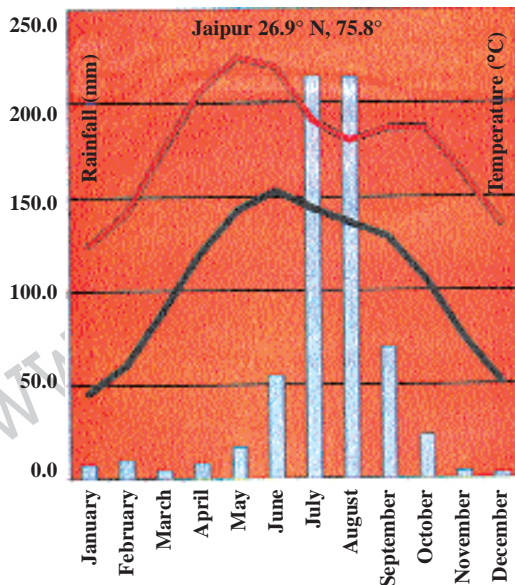
**INSTRUCTIONS:**

- i) Write answers to the FOUR questions in 1 – 2 sentences.
  - ii) Each question carries ONE mark. 4 × 1 = 4
1. Do girls get similar opportunities for further studies as boys?
  2. What is the main reason for disagreement between developed and developing countries about AGW?
  3. Name any two rivers which flows through the rift valley?
  4. Why does the release of methane responsible for further extension of global warming?

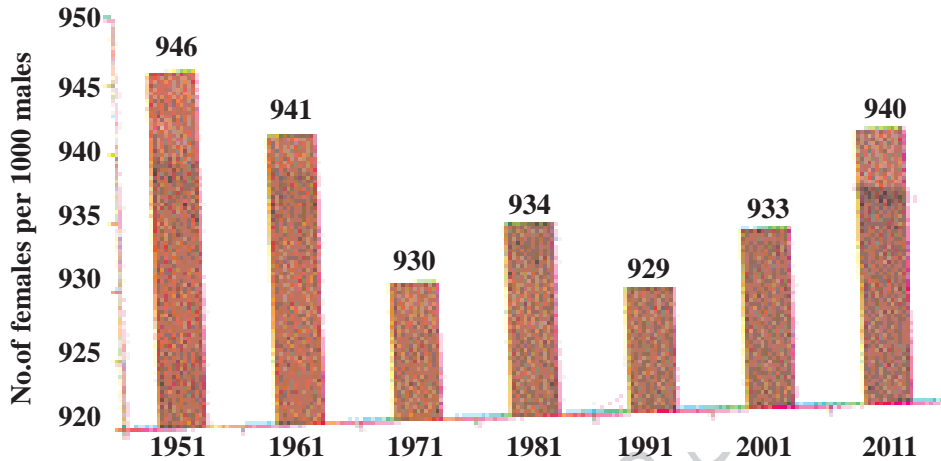
**SECTION – II**

**INSTRUCTIONS:**

- i) Write answers to the FIVE questions in 1 – 2 sentences.
  - ii) Each question carries TWO marks. 5 × 2 = 10
5. What is the influence of the Himalayas on Indian agriculture?
  6. Write two measures to achieve better literacy rate in Andhra Pradesh?
  7. How does deforestation affect global warming?
  8. Can you explain how differences in temperature in Jaipur and Chennai?



9. Observe the following graph and answer the questions given below.



- a) What does the above graph indicate?
- b) How was the gender bias for many decades?

**SECTION – III**

**INSTRUCTIONS:**

- i) Write FOUR questions given below.
- ii) Each question has internal choice. You can choose anyone.
- iii) Each question carries FOUR marks. 4 × 4 = 16

10. Plateau regions in India do not support agriculture as much as the plain regions. What are the reasons for this?

(OR)

Do you think the classification of economic activities into different sectors is useful? Explain how?

11. Read the following paragraph and write your opinion on it.

In many parts of the country, girls education is still given less priority by parents compared to boys education. While girls may study for a few classes. They may not complete their schooling. A welcome trend in Himachal Pradesh is the lower gender bias. Himachali parents have ambitious educational goals for their girls just as for their boys.

(OR)

**Read the following paragraph and write your comments on the effect of deforestation.**

Most scientists from around the world agree on this much. AGW is real. It is happening and it is leading to rapid and drastic climate change. They warn that severe weather and other changes will increase in the coming years and threaten life as we know it. One of the human activities that contribute to global warming is deforestation.

12. How is climate change causing global warming?

Q. Suggest measures to minimise the influence of the global warming?

(OR)

Q. "Only 5% of water is used for domestic purposes and yet a large section of the population does not access to the water". Discuss.

13. Locate the following in the out line map & India given.
- 1) The mountain ranges that separate India into two parts.
  - 2) The tropic of cancer that passes through in India.
  - 3) The river that flows through Thar Desert.
  - 4) The place which is situated on the three seas in India.

A:



- 1) The mountain ranges that separate India into two parts – Vindhyas
- 2) The tropic of cancer that passes through in India – Tropic of Cancer
- 3) The river that flows through Thar Desert – Luni
- 4) The place which is situated on the three seas in India – Kanya Kumari

(OR)

Locate the places underlined in the paragraph given below on the outline map of India.

The Himalayan rivers are perennial. The rivers belong to three principal systems. The Indus, The Ganga and the Brahmaputra. The peninsular rivers are The Godavari, The Krishna, The Mahanadi, The Cauveri and others. They are not perennial.

A:



INSTRUCTIONS:

- i) Write CAPITAL LETTERS showing the correct answer for the following questions in the brackets provided against each question.
- ii) Each question carries  $\frac{1}{2}$  Mark.
- iii) Answer ALL the questions.
- iv) Answers are to be written in the question paper only.
- v) Marks will not be awarded in case of any over writing and rewriting or erased answers.

$$20 \times \frac{1}{2} = 10$$

SECTION – IV

- 14. The Mawdok dympep Valley is in ..... ( )  
A) Sikkim                      B) Meghalaya                      C) Assam                      D) Tripura
- 15. The Shivalik ranges in Assam are called ..... ( )  
A) Cachar hills                      B) Jammu Hills  
C) Mishmi Hills                      D) Mizo Hills
- 16. The world's biggest river based island is ..... ( )  
A) Srilanka                      B) Lakshadweep                      C) Barren                      D) Majuli
- 17. Which of the following is not related to peninsular rivers ( )  
A) None–perennial rivers  
B) Absence of meanders  
C) They are characterised by fixed course  
D) They have carved out deep V shaped valleys.
- 18. Find out the wrong sentence about continental climate. ( )  
A) They are characterised by low diurnal range of temperatures  
B) They are extreme weather conditions  
C) They are far away the sea shore  
D) The difference in diurnal maximum and minimum temperature is high.
- 19. Insolation is maximum at this place .... ( )  
A) Temperate zone                      B) Tropical zone  
C) Polar zone                      D) None of the above
- 20. There are varied climatic conditions in India due to ( )  
A) The existence of perennial  
B) Near by seas  
C) The deserts and plains  
D) Vast areas and latitudinal differences

21. The Godavari and the Krishna rivers are flowing towards the East. This is because ( )  
A) Their origin is western ghats  
B) Deccan plateau is slanting towards east  
C) Bay of Bengal is located in the East  
D) Their course is nearer to the seas.
22. GDP is the total value of ..... produced during a particular year. ( )  
A) All goods and services  
B) All final goods and services  
C) All intermediate goods and services  
D) Both B and C
23. The better criterion for a nation development ( )  
A) Percapita income  
B) GNP  
C) Literacy rate  
D) Human Development Index
24. Disguised employment is seen in .... ( )  
A) Agriculture  
B) Industries  
C) Service sector  
D) All of the above
25. Human Development report is published by ( )  
A) World Bank  
B) UNO  
C) UNDP  
D) UNESCO
26. This sector does not produce goods directly ( )  
A) Primary  
B) Secondary  
C) Tertiary  
D) None
27. Due to the emergence of new Telangana state Andhra Pradesh lost common boundary with ( )  
A) Maharashtra  
B) Odisha  
C) Karnataka  
D) Tamil nadu
28. Identify the incorrect set from the following ( )  
A) Nas bandi – Family planning  
B) Charai bandi – Srama Daan  
C) Nasha bandi – Ban on liquor  
D) Kurhad bandi – Ban on felling trees
29. Which of the following is not correct solution regarding ground water? ( )  
A) De link the connection between ownership of land and water drawn from the underground.  
B) No restrictions on the utilisation of water  
C) Use of ground water controlled by local bodies  
D) Under ground water is treated as public property
30. The word anthropogenic means .... ( )  
A) Nature  
B) flora  
C) Fauna  
D) Humans
31. The coriolis effect is caused by ... ( )  
A) Earth's rotation  
B) Wind movements  
C) Jet streams  
D) Cyclonic disturbances

32. Unpaid work is mostly done by ( )  
A) men in organised sector  
B) women in unorganised sector  
C) Labours in unorganised sector  
D) Women at home
33. The Himalayan rivers are perennial because ... ( )  
A) They rise in Himalayas  
B) They flow continuously  
C) They get water from rain as well as melting from snow  
D) They rise in the peninsular plateau

**PART - B**

**ANSWERS**

14-B; 15-A; 16-D; 17-D; 18-A; 19-B; 20-D; 21-B; 22-B; 23-D; 24-A; 25-C; 26-C; 27-A; 28-B; 29-B; 30-D; 31-A; 32-D; 33-C.

**Writer: K. Srinivas Rao**