

**BOARD OF SECONDARY EDUCATION (AP)**

**SUMMATIVE ASSESSMENT – I**

**TENTH SOCIAL STUDIES MODEL PAPER**

**PAPER – II (ENGLISH VERSION)**

**Time: 2 hrs. 45 mins.**

**PART – A & B**

**Maximum Marks: 40**

**Time: 2 hrs. 15 mins.**

**PART – A**

**Marks: 30**

**INSTRUCTIONS:**

- i) 15 minutes allocated to read the Question Paper, 2.30 Hours allocated to write answers.
- ii) PART – A must be answered in a separate answer sheet.
- iii) Students can take PART – A (Question Paper) with them.
- iv) Map and PART – B (Bit paper) should tag to the answer sheet and gave them to the invigilator.

**SECTION – I**

**INSTRUCTIONS:**

- i) Write answers to the FOUR questions in 1 – 2 sentences.
- ii) Each question carries ONE mark. 4 × 1 = 4
1. Why did Britain and other western countries encourage Hitler and the Nazis?
2. "For this Earth is not allotted to any one nor is it presented to anyone as a gift."  
Q. Is Hitler the idea of world conquest here?
3. What are the three principles of Sun Yat Sen indicate? (San Min Chui)
4. Why did Gandhiji write a letter to Adolf Hitler?

**SECTION – II**

**INSTRUCTIONS:**

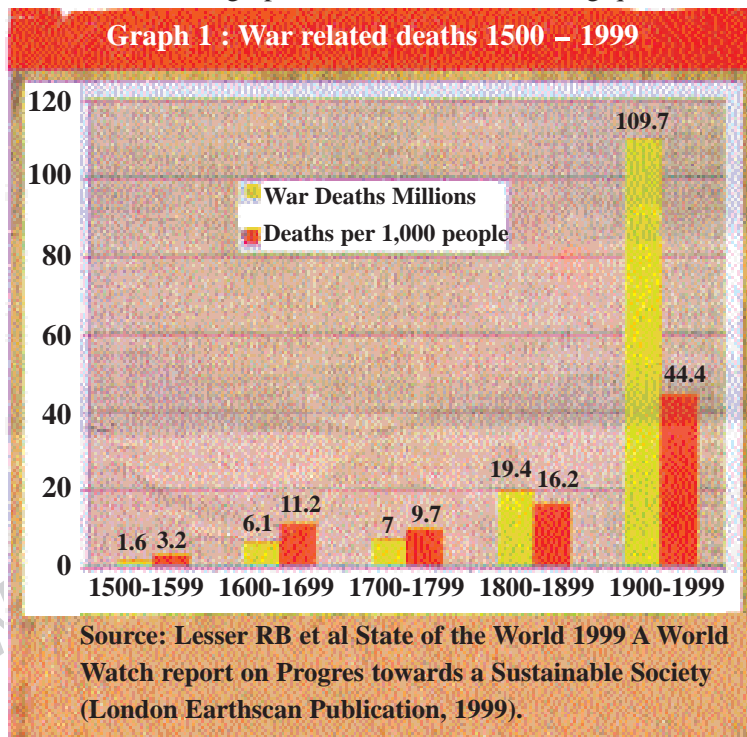
- i) Write answers to the FIVE questions in 1 – 2 sentences.
- ii) Each question carries TWO marks. 5 × 2 = 10
5. If one country takes an aggressive stance another country should the other country also respond aggressively? Can there be other ways of handling the problem?

6. Based on the time line chart answer the following.



- What is the main aim of comintern?
- Who ruled Russia before 1917 revolution?

7. Observe the below graph and answer the following questions.



- What does the above information indicate?
- What may be reason for highest war deaths?

8. How do you appreciate Patel with his great efforts in merging the princely states in Indian Union?
9. According to you what would be the reason for and against supporting the British in Second World War?

### SECTION - III

#### INSTRUCTIONS:

- i) Write FOUR questions given below.
- ii) Each question has internal choice. You can choose any one.
- iii) Each question carries FOUR marks. 4 × 4 = 16
10. Compare to the national movement in India and Nigeria can you explain why it was stronger in India?

(OR)

How were workers and peasants mobilised during the last years of freedom struggle?

11. Read the following paragraph and explain how Russia emerged as supreme power under the leadership of Stalin?

After the death of Lenin in 1924, Stalin emerged as the leader of the Communist Party. Over the next decades he established his obsolete control and put an end to all opposition. He used his undisputed power to build the economy of USSR.

(OR)

Read the following paragraph and answer the question below.

In 1937 elections Muslim League has secured very lowest percentage of votes (4.4%). But in the elections conducted after 10 years, Muslim League has recorded huge victory.

**Q. Explain the reasons behind ideological change of Muslims between 1937 – 1947.**

12. The Reckless oil extractions has done by Multinational companies in Nigeria caused many problems. What do you think the problems faced by the people due to oil pollution?

(OR)

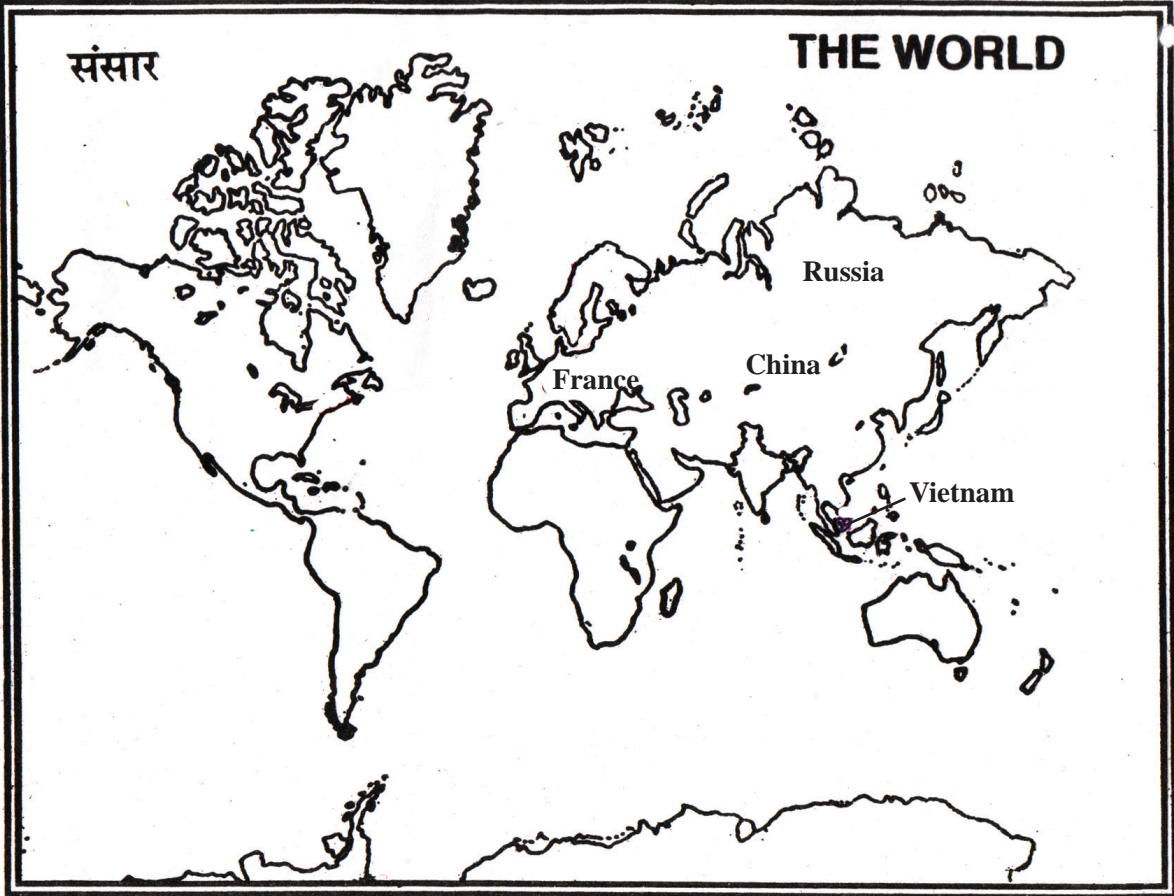
In what ways were Jews persecuted during the Nazi Germany. Do you think in every country some people are differentiated because of their identity?

13. Read the following paragraph.

After the Republican Revolution of Sun-Yat-Sen in China the Vietnamese too were inspired to establish a republican and democratic rule in Vietnam. Many students were went to China, France and later to USSR to study and learn about new political ideas.

Q. Point out the above the underlined countries in a given world map.

A:

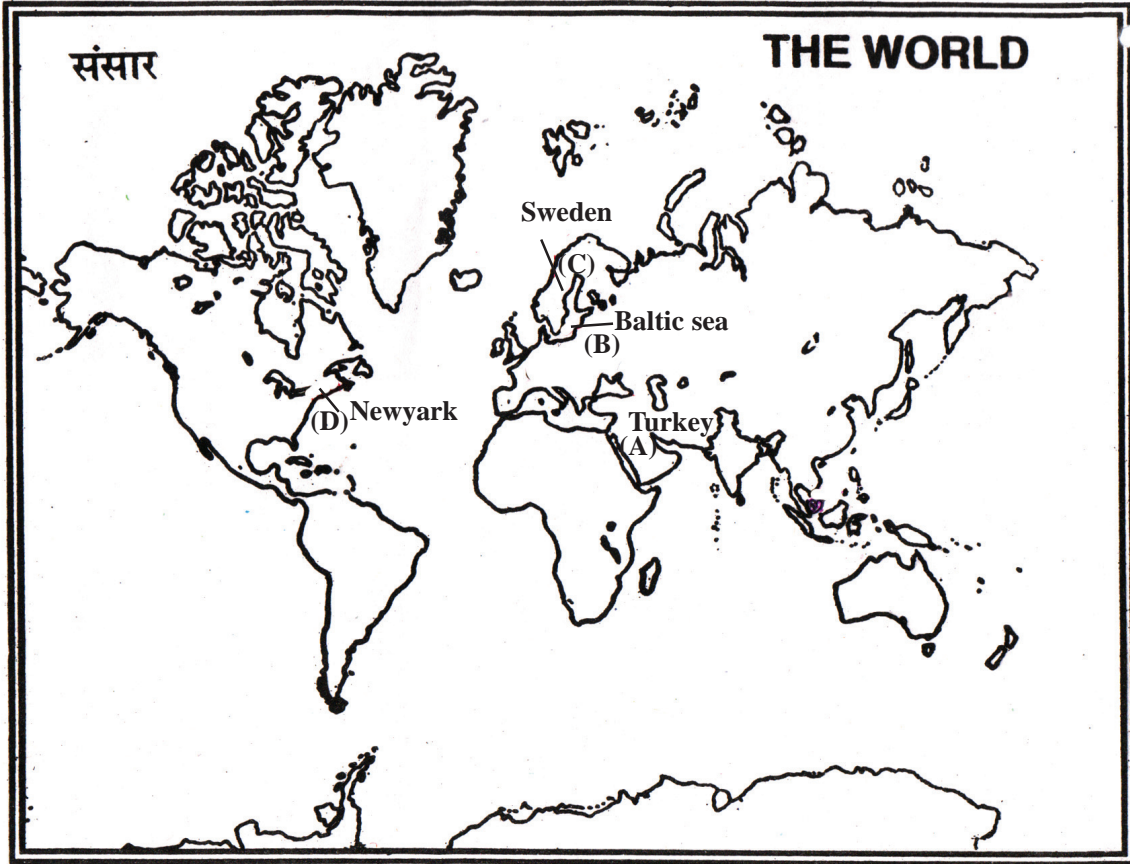


(OR)

Q. Locate the following on the world map given.

- A) The country popularly called sick man of Europe that located below the black sea.
- B) Locate the sea adjacent to Finland.
- C) Point out the country that located between Norway and Finland.
- D) The city in which UNO head quarters situated.

A:



- A) The country popularly called sick man of Europe that located below the black sea – Turkey
- B) Locate the sea adjacent to Finland – Baltic sea
- C) Point out the country that located between Norway and Finland – Sweden
- D) The city in which UNO head quarters situated – New york

**INSTRUCTIONS:**

- i) Write the capital letters (A, B, C, D) showing the correct answer for the following in the brackets provided against each question.
- ii) Each question carries  $\frac{1}{2}$  mark.
- iii) Answer all the questions.
- iv) Answers are to be written in the question paper only.
- v) Marks will not be awarded in case of any over writing and rewriting or erased answers.

$$20 \times \frac{1}{2} = 10$$

**SECTION – IV**

- 14. Sun-Yat-Sen's ideas became the basis of the political philosophy of the ( )  
A) CCP B) Socialist Party of China  
C) Guomindang D) China Liberation Party
- 15. Biafran war took place in ( )  
A) Nigeria B) Vietnam C) China D) Kenya
- 16. Name the party which tried to build a secular understanding among its members. ( )  
A) Muslim League B) Hindu Mahasabha  
C) RSS D) Congress
- 17. The name Pakistan was first coined by ..... ( )  
A) Shaukath Ali B) Mohammad Ali  
C) Choudary Rehmat Ali D) Mohammad Ali Jinnah
- 18. "The woman is the most stable element in the preservation of a folk". The statement was given by ( )  
A) Hitler B) Robert Lay  
C) Mussolini D) Stalin
- 19. British encouraged Hitler and the Nazis to come together against which country in the appeasement of Hitler ( )  
A) Russia B) U.S.A. C) Japan D) Italy
- 20. International women's suffragist movement fought for ( )  
A) World peace B) Liberty  
C) Voting rights D) Environment protection
- 21. Enabling act 1933 refers to ( )  
A) Independent nation B) Economic policy  
C) Dictatorship in Germany D) Military rule in Germany
- 22. May 4<sup>th</sup> movement of China against the decisions of ( )  
A) Paris peace conference B) Versailles peace treaty  
C) Sun – Yat – Sen's decisions D) Chiang Kaishek decisions

23. Why did the US decide to intervene the Vietnam war ( )  
A) Vietnam fought against U.S.  
B) to help France  
C) the communists have a sphere of influence  
D) None
24. After the failure of ..... Gandhiji started Quit India movement ( )  
A) Rowlat act  
B) Cabinet mission  
C) Cripps mission  
D) Simon commission
25. .... party led the struggle of farmers in Telangana. ( )  
A) Congress party  
B) Socialist party  
C) Communist party  
D) Hindu Mahasabha
26. Which of the following events pave the way for USA to join the Second World War ( )  
A) Germany invasion against Poland  
B) Battle of Stalingrad  
C) Attack on Pearl Harbour by Japan  
D) All of the above
27. Who treated as most undesirables in those times of war? ( )  
A) Blacks  
B) Jews  
C) Gypsies  
D) All
28. The New Deal Policy was announced by ( )  
A) Stalin  
B) Hitler  
C) Winston Churchill  
D) None
29. Mahatma Gandhi considered as the prominent person of 20<sup>th</sup> century because ( )  
A) He launched Non-cooperation movement  
B) He led Quit India movement  
C) He organised the freedom struggle on the principle of Non-Violence, Satyagraha  
D) Suffered a lot many times during freedom struggle
30. A plant killer agent organge why ( )  
A) It was organge in colour  
B) It was used to destroy orange crop  
C) Its drums marked with orange bands  
D) None of the above
31. Holocaust means ( )  
A) great depression  
B) Mass execution of human beings  
C) Industrial Breakdown  
D) Bloodless revolution

32. The book which criticised satirically the communists ( )  
A) Asian Drama B) Animal Farm  
C) Un to the last D) Mother
33. Which of the following person is basically a socialist and radical humanist ( )  
A) Ravindranath Tagore B) Subhash Chandra Bose  
C) M.N. Roy D) George Orwell

**PART – B ANSWERS**

14-C; 15-A; 16-D; 17-C; 18-A; 19-A; 20-C; 21-C; 22-B; 23-C; 24-C; 25-C; 26-C; 27-B; 28-D; 29-C; 30-C; 31-B; 32-B; 33-C.

**Writer: K. Srinivasa Rao**